




ADDING WITHIN 20



5		12		8		10			
-3									
2	20		17	-8	9		14	-8	
			+1		-5				
18					4		20		
	20		5			18			




ADDING WITHIN 20

The crossword puzzle grid contains the following numbers and math problems:

- Across:**
 - 12 + 4 = 16
 - 10
 - 10
 - 17
 - 20 - 16 = 4
 - 13
 - 20
 - 6
 - 18
- Down:**
 - 7
 - 11
 - 17
 - 11
 - 10
 - 6
 - 4
 - +5
 - +4
 - +1
 - 13
 - 18

Decorative elements include a large star on the left, a starburst in the center, and stars hanging from the top and bottom right.

ADDING WITHIN 20



13		17	-15	2						
-3								-10		
			-8	11		17	-14		+6	9
+6				+7		+3		+9		
				18				12		
						-14				
	-15	2		9	-3					

ADDING WITHIN 20

15

18

12 -9 +4 7

2	+9	11	-6	
---	----	----	----	--

+6

+8

18		17	+2	
----	--	----	----	--

-1

-2

7	+9		-2	14		20	-5	
---	----	--	----	----	--	----	----	--





19

3

-6

13		4	+8	
----	--	---	----	--

ADDING WITHIN 20



	9		20		6	+9	
			-5				
18			15	+4		-10	9
19		18	6		4	+8	12
-9			+7				
10	+9	19		4	+9	13	16
							-6
7		8		18		10	17
		+8					
12		9	+7	16		11	20
		4					

ADDING WITHIN 20

A crossword puzzle grid with numbers and math problems. The grid is decorated with stars, birds, and a banner.

Decorative elements: A banner with three stars hangs from the top left. Several birds are flying in the sky. A large star is on the right. At the bottom, there are stylized stars on vines.

Grid contents:

- Top row: 18
- Row 2: 8
- Row 3: 11, [], 6, [], 15
- Row 4: 3
- Row 5: 15
- Row 6: 4, [], 6, +8, [], +5, 19, [], 20
- Row 7: 10
- Row 8: 15
- Row 9: 13
- Row 10: 10, [], 17, [], 2, +8, []
- Row 11: 9, +7, []
- Row 12: 20
- Row 13: 5
- Row 14: 11
- Row 15: 20
- Row 16: 9

ADDING WITHIN 20

The crossword puzzle grid contains the following numbers and math problems:

- Vertical 1: 16
- Vertical 2: 20
- Horizontal 1: 10, 11, 8
- Vertical 3: 10
- Vertical 4: -3
- Horizontal 2: 7, 20, 17, -8, 9, 14, -7
- Vertical 5: +2
- Vertical 6: -5
- Vertical 7: +3
- Vertical 8: 17
- Vertical 9: 4
- Vertical 10: 17
- Horizontal 3: 20, 5, 17

ADDING WITHIN 20

13

18

19 -9 +4 14

2	+9	11	-8	
---	----	----	----	--

+6

9

+8

20		17	-5	
----	--	----	----	--

-1

-2

7	+9		-2	14		20	-5	
---	----	--	----	----	--	----	----	--

19

2

-6

13

4 +5