

JUMPING ON THE NUMBER LINE

ADDITION FLASHCARDS

Add 0 TO A NUMBER



JUMPING ON THE NUMBER LINE



Start at 1
and hop
forward 0
spaces.



Start at 2
and hop
forward
0 spaces.



Start at 3
and hop
forward
0 spaces.



Start at 4
and hop
forward 0
spaces.



Start at 5
and hop
forward
0 spaces.



Start at 6
and hop
forward
0 spaces.



Start at 7
and hop
forward 0
spaces.



Start at 8
and hop
forward 0
spaces.



Start at 9
and hop
forward 0
spaces.

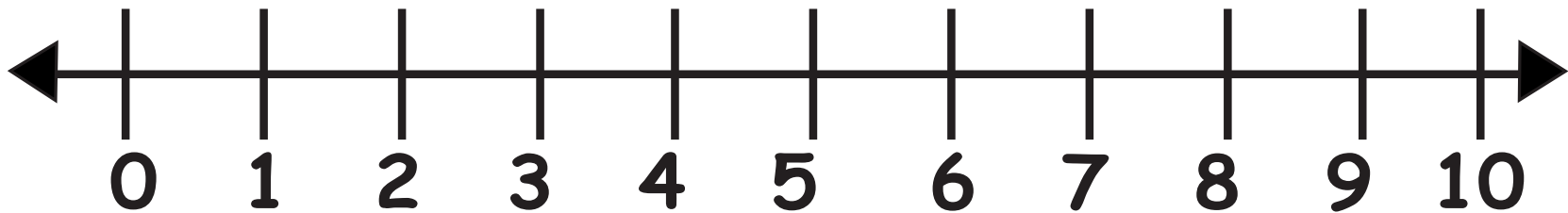



Start at 10
and hop
forward 0
spaces.





JUMPING ON THE NUMBER LINE





Use one of these frogs to hop on the number line.
Use the other ones to act out frog problems on the story mat.



$1 + 0 = \square$



$2 + 0 = \square$



$3 + 0 = \square$



$4 + 0 = \square$



$5 + 0 = \square$



$6 + 0 = \square$



$7 + 0 = \square$



$8 + 0 = \square$



$9 + 0 = \square$



$10 + 0 = \square$



JUMPING ON THE NUMBER LINE

ADDITION FLASHCARDS

Add 1 TO A NUMBER



JUMPING ON THE NUMBER LINE



Start at 0
and hop
forward
1 space.



Start at 2
and hop
forward
1 space.



Start at 3
and hop
forward
1 space.



Start at 4
and hop
forward
1 space.



Start at 5
and hop
forward
1 space.



Start at 6
and hop
forward
1 space.



Start at 7
and hop
forward
1 space.



Start at 8
and hop
forward
1 space.

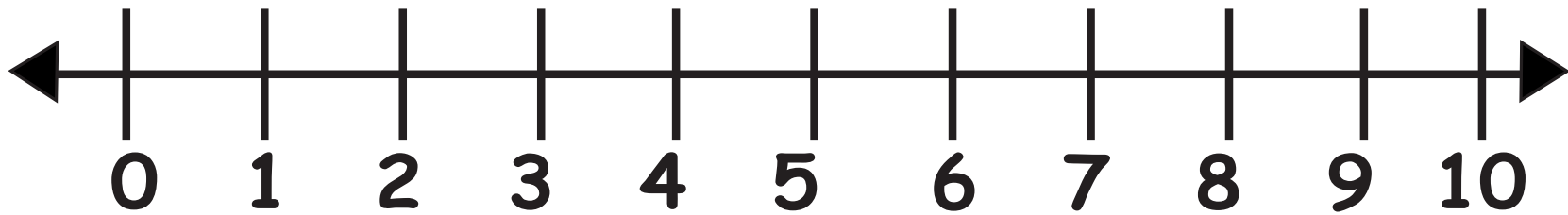



Start at 9
and hop
forward
1 space.





JUMPING ON THE NUMBER LINE





Use one of these frogs to hop on the number line.
Use the other ones to act out frog problems on the story mat.



$1 + 0 = \square$



$2 + 1 = \square$



$3 + 1 = \square$



$4 + 1 = \square$



$5 + 1 = \square$



$6 + 1 = \square$



$7 + 1 = \square$



$8 + 1 = \square$



$9 + 1 = \square$



JUMPING ON THE NUMBER LINE

ADDITION FLASHCARDS

COUNTING ON



JUMPING ON THE NUMBER LINE



Start at 1
and hop
forward
1 space.



Start at 2
and hop
forward
1 space.



Start at 3
and hop
forward
1 space.



Start at 4
and hop
forward
1 space.



Start at 5
and hop
back 1
space.



Start at 6
and hop
back 1
space.



Start at 7
and hop
forward
1 space.



Start at 8
and hop
forward
1 space.



Start at 3
and hop
forward
1 space.



Start at 5
and hop
forward 3
spaces.



Start at 7
and hop
forward
3 spaces.



Start at 1
and hop
forward 0
spaces.



Start at 2
and hop
forward 2
spaces.



Start at 3
and hop
forward 2
spaces.



Start at 4
and hop
forward 2
spaces.



Start at 5
and hop
forward 2
spaces.



Start at 6
and hop
forward 2
spaces.



Start at 7
and hop
forward 2
spaces.



Start at 8
and hop
forward 2
spaces.



Start at 4
and hop
forward
3 spaces.

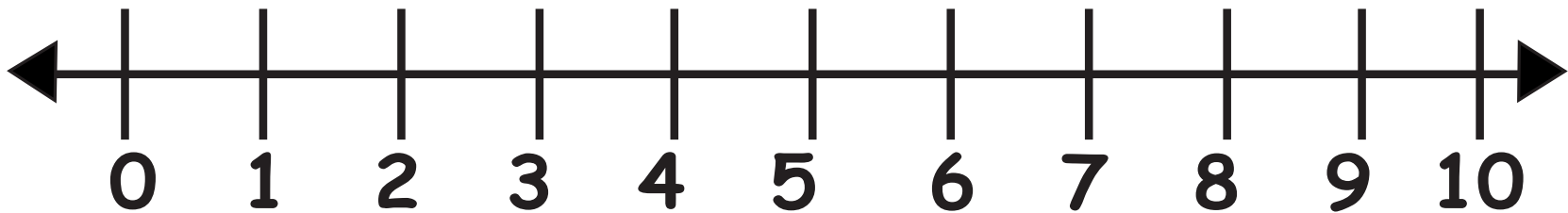



Start at 6
and hop
forward
3 spaces.





JUMPING ON THE NUMBER LINE





Use one of these frogs to hop on the number line.
Use the other ones to act out frog problems on the story mat.



$1 + 1 = \square$



$2 + 1 = \square$



$3 + 1 = \square$



$4 + 1 = \square$



$5 + 1 = \square$



$6 + 1 = \square$



$$7 + 1 = \square$$



$$8 + 1 = \square$$



Start at big number

$$1 + 3 = \square$$



$$5 + 3 = \square$$



$$7 + 3 = \square$$



Start at big number

$$0 + 1 = \square$$



$2 + 2 = \square$



$3 + 2 = \square$



$4 + 2 = \square$



$5 + 2 = \square$



$6 + 3 = \square$



$7 + 2 = \square$



$8 + 3 = \square$



$4 + 3 = \square$



$6 + 3 = \square$



JUMPING ON THE NUMBER LINE

ADDITION FLASHCARDS

ADDING WITHIN 5



JUMPING ON THE NUMBER LINE



Start at 1
and hop
forward
1 space.



Start at 2
and hop
forward
1 space.



Start at 3
and hop
forward
1 space.



Start at 4
and hop
forward
1 space.



Start at 2
and hop
forward
2 spaces.



Start at 3
and hop
forward
2 spaces.



Start at 4
and hop
forward
1 space.



Start at 5
and hop
forward
0 spaces.



Start at 0
and hop
forward
1 space.

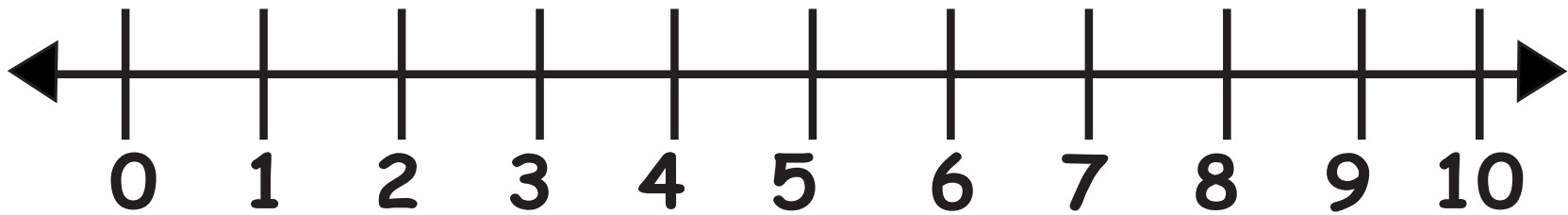



Start at 0
and hop
forward 0
spaces.





JUMPING ON THE NUMBER LINE





Use one of these frogs to hop on the number line.
Use the other ones to act out frog problems on the story mat.



$1 + 1 = \square$



Start at big number

$1 + 2 = \square$



Start at big number

$1 + 3 = \square$



Start at big number

$1 + 4 = \square$



$2 + 2 = \square$



$3 + 2 = \square$



Start at big number

$$4 + 1 = \square$$



Start at big number

$$5 + 0 = \square$$



Start at big number

$$0 + 1 = \square$$



$$0 + 0 = \square$$



JUMPING ON THE NUMBER LINE

ADDITION FLASHCARDS

ADDING WITHIN 10



JUMPING ON THE NUMBER LINE



Start at 1
and hop
forward
1 space.



Start at 2
and hop
forward
1 space.



Start at 3
and hop
forward
1 space.



Start at 4
and hop
forward
1 space.



Start at 2
and hop
forward
2 spaces.



Start at 3
and hop
forward
2 spaces.



Start at 4
and hop
forward
1 space.



Start at 5
and hop
forward
0 spaces.



Start at 4
and hop
forward
2 spaces.



Start at 5
and hop
forward 2
spaces.



Start at 6
and hop
forward
2 spaces.



Start at 7
and hop
forward
2 spaces.



Start at 8
and hop
forward 2
spaces.



Start at 3
and hop
forward 3
spaces.



Start at 4
and hop
forward 3
spaces.



Start at 5
and hop
forward 3
spaces.



Start at 6
and hop
forward 3
spaces.



Start at 7
and hop
forward 3
spaces.



Start at 6
and hop
forward 4
spaces.



Start at 4
and hop
forward 4
spaces.



Start at 5
and hop
forward 5
spaces.



Start at 1
and hop
forward 0
spaces.

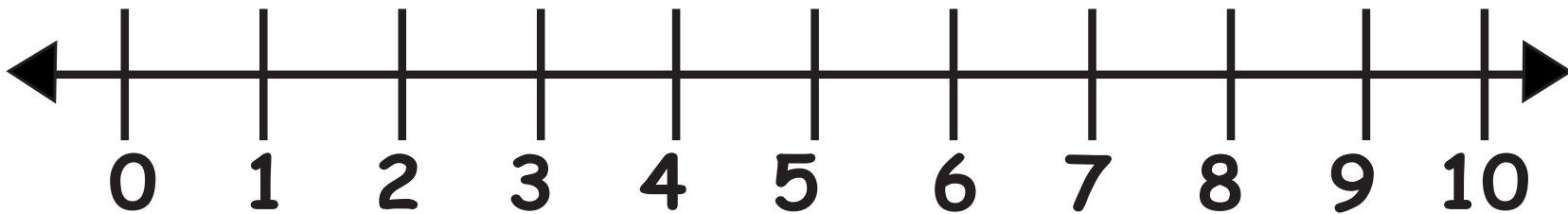



Start at 0
and hop
forward 0
spaces.





JUMPING ON THE NUMBER LINE





Use one of these frogs to hop on the number line.
Use the other ones to act out frog problems on the story mat.



$1 + 1 =$



Start at big number

$1 + 2 =$



Start at big number

$1 + 3 =$



Start at big number

$1 + 4 =$



$2 + 2 =$



Start at big number

$3 + 2 =$



$$4 + 1 = \square$$



$$5 + 0 = \square$$



Start at big number

$$2 + 4 = \square$$



Start at big number

$$2 + 5 = \square$$



Start at big number

$$2 + 7 = \square$$



Start at big number

$$2 + 8 = \square$$



$3 + 3 = \square$



Start at big number

$3 + 4 = \square$



Start at big number

$3 + 5 = \square$



Start at big number

$3 + 6 = \square$



Start at big number

$3 + 7 = \square$



Start at big number

$4 + 6 = \square$



$$4 + 4 = \square$$



$$5 + 5 = \square$$



Start at big number

$$0 + 1 = \square$$



$$0 + 0 = \square$$



JUMPING ON THE NUMBER LINE

ADDITION FLASHCARDS

MAKE TEN



JUMPING ON THE NUMBER LINE



Start at 9
and hop
forward
1 space.



Start at 8
and hop
forward
2 spaces.



Start at 7
and hop
forward
3 spaces.



Start at 6
and hop
forward 4
spaces.



Start at 5
and hop
forward
5 spaces.



Start at 6
and hop
forward
4 spaces.



Start at 7
and hop
forward 3
spaces.



Start at 8
and hop
forward 2
spaces.



Start at 9
and hop
forward 1
space.

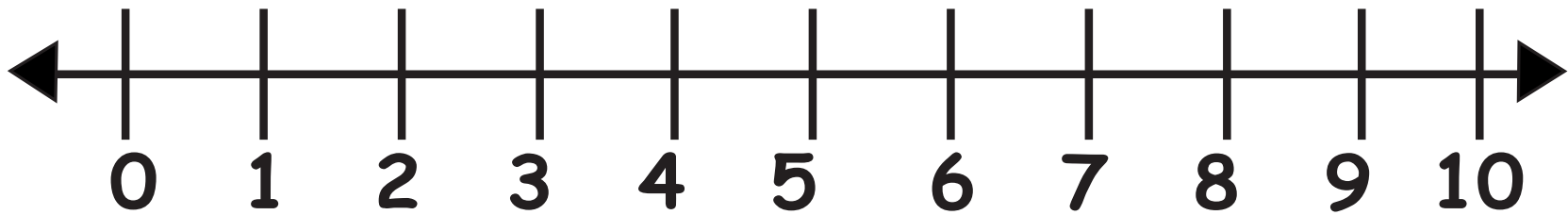



Start at 10
and hop
forward 0
spaces.





JUMPING ON THE NUMBER LINE





Use one of these frogs to hop on the number line.
Use the other ones to act out frog problems on the story mat.



Start at big number

$$1 + 9 = \square$$



Start at big number

$$2 + 8 = \square$$



Start at big number

$$3 + 7 = \square$$



Start at big number

$$4 + 6 = \square$$



$$5 + 5 = \square$$



$$6 + 4 = \square$$



$7 + 3 = \square$



$8 + 2 = \square$



$9 + 1 = \square$



$10 + 0 = \square$



JUMPING ON THE NUMBER LINE

ADDITION FLASHCARDS

DOUBLES



JUMPING ON THE NUMBER LINE



Start at 1
and hop
forward
1 space.



Start at 2
and hop
forward
2 spaces.



Start at 3
and hop
forward
3 spaces.



Start at 4
and hop
forward 4
spaces.

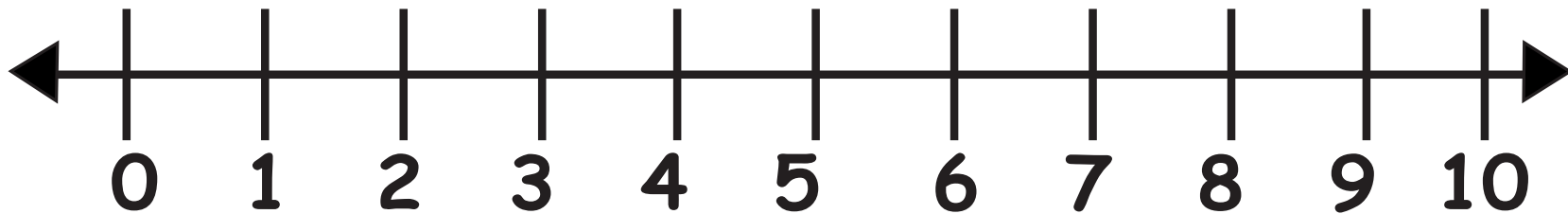



Start at 5
and hop
forward
5 spaces.





JUMPING ON THE NUMBER LINE





Use one of these frogs to hop on the number line.
Use the other ones to act out frog problems on the story mat.



$1 + 1 = \square$



$2 + 2 = \square$



$3 + 3 = \square$



$4 + 4 = \square$



$5 + 5 = \square$

