

# Maze:Making 2

Instruction: Work your way through the maze and find the expressions that make 2.

**START**

$$8 \div 4$$

$$14 \div 7$$

$$4 \div 2$$

$$6 \div 1$$

$$14 \div 2$$

$$6 \div 3$$

$$10 \div 5$$

$$12 \div 6$$

$$12 \div 4$$

$$16 \div 8$$

$$15 \div 5$$

$$8 \div 2$$

$$18 \div 9$$

$$20 \div 10$$


$$12 \div 6$$

**GOAL!**

# Maze: Making 2

Instruction: Work your way through the maze and find the expressions that make 2.

START

 $8 \div 4$

 $14 \div 7$

 $4 \div 2$

 $6 \div 3$

$18 \div 6$

 $10 \div 2$

 $14 \div 2$



 $12 \div 6$

$10 \div 5$

$4 \div 1$

 $16 \div 4$

$16 \div 8$

 $18 \div 9$

$18 \div 9$

$20 \div 10$

GOAL!

# Maze:Making 2

Instruction: Work your way through the maze and find the expressions that make 2.

START

$10 \div 2$   $14 \div 7$   $18 \div 3$   $20 \div 4$

$6 \div 3$   $16 \div 2$   $20 \div 5$   $18 \div 2$

$8 \div 4$   $18 \div 9$   $4 \div 2$   $12 \div 3$

$12 \div 6$   $6 \div 2$   $16 \div 8$   $14 \div 7$

GOAL!

# Maze:Making 2

Instruction: Work your way through the maze and find the expressions that make 2.

**START**

$8 \div 4$

$18 \div 3$

$14 \div 7$

$20 \div 5$

$4 \div 2$

$16 \div 8$

$6 \div 3$

$10 \div 5$

$5 \div 1$

$12 \div 6$

$18 \div 9$

$8 \div 2$

$10 \div 2$

$11 \div 1$

$20 \div 10$

$18 \div 3$

$15 \div 5$

$6 \div 2$

$5 \div 1$

**$14 \div 7$**   
**GOAL!**

$8 \div 4$

$4 \div 1$

$6 \div 3$

# Maze:Making 2

Instruction: Work your way through the maze and find the expressions that make 2.

GOAL!



$14 \div 7$

$24 \div 4$

$4 \div 2$

$6 \div 3$

$25 \div 5$

$12 \div 2$

$12 \div 6$

$18 \div 9$

$16 \div 8$

$10 \div 5$

$6 \div 3$

$7 \div 1$

$32 \div 8$

START