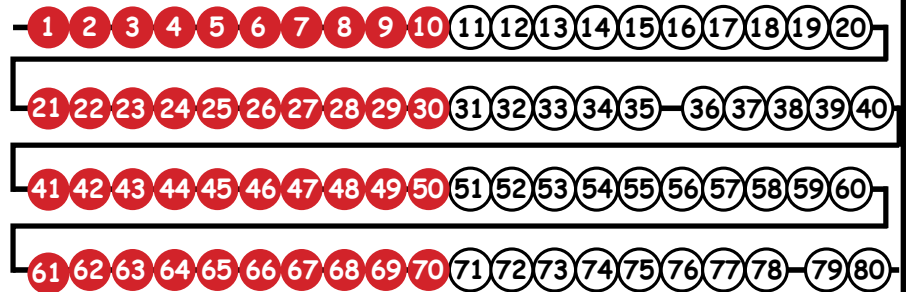




$$35 + \underline{\quad} = 78$$

Use your beaded number line to solve

[www.drnickinewton.com](http://www.drnickinewton.com)



$$35 + \underline{43} = 78$$

[www.drnickinewton.com](http://www.drnickinewton.com)



$$20 + \underline{\quad} = 34$$

Use your beaded number line to solve

[www.drnickinewton.com](http://www.drnickinewton.com)



$$20 + \underline{14} = 34$$

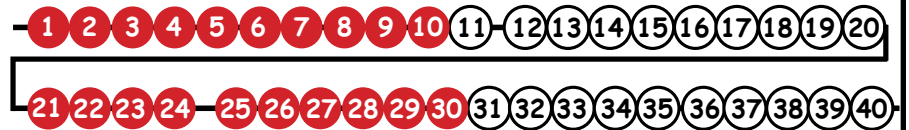
[www.drnickinewton.com](http://www.drnickinewton.com)



$$11 + \underline{\quad} = 24$$


Use your beaded number line to solve

[www.drnickinewton.com](http://www.drnickinewton.com)



$$11 + \underline{13} = 24$$

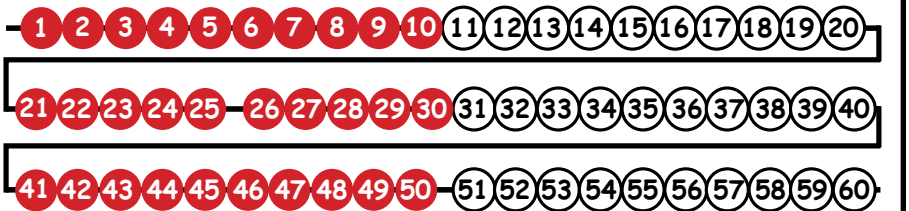
[www.drnickinewton.com](http://www.drnickinewton.com)



$$25 + \underline{\quad} = 50$$

Use your beaded number line to solve

[www.drnickinewton.com](http://www.drnickinewton.com)



$$25 + \underline{25} = 50$$

[www.drnickinewton.com](http://www.drnickinewton.com)



$$14 + \underline{\quad} = 38$$

Use your beaded number line to solve

[www.drnickinewton.com](http://www.drnickinewton.com)



$$14 + \underline{24} = 38$$

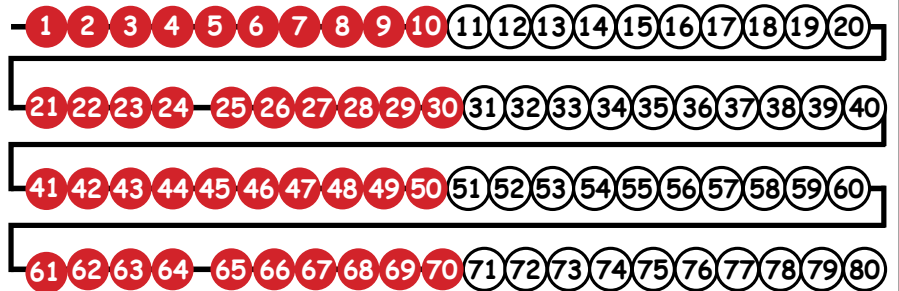
[www.drnickinewton.com](http://www.drnickinewton.com)



$$24 + \underline{\quad} = 64$$

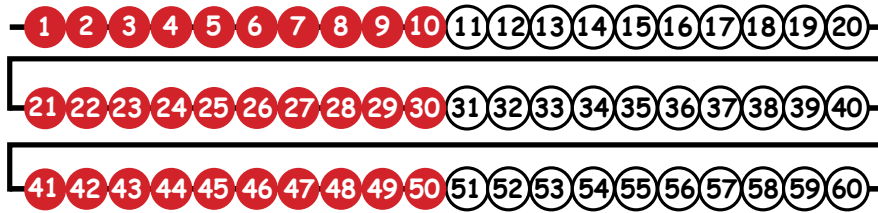
Use your beaded number line to solve

[www.drnickinewton.com](http://www.drnickinewton.com)



$$24 + \underline{40} = 64$$

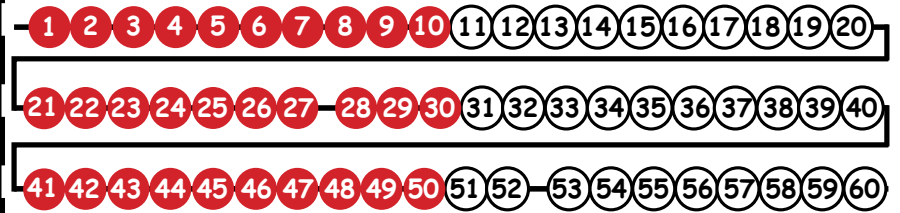
[www.drnickinewton.com](http://www.drnickinewton.com)



$$27 + \underline{\quad} = 52$$

Use your beaded number line to solve

[www.drnickinewton.com](http://www.drnickinewton.com)



$$27 + \underline{25} = 52$$

[www.drnickinewton.com](http://www.drnickinewton.com)



$$31 + \underline{\quad} = 71$$

Use your beaded number line to solve

[www.drnickinewton.com](http://www.drnickinewton.com)



$$31 + \underline{40} = 71$$

[www.drnickinewton.com](http://www.drnickinewton.com)



$$12 + \underline{\quad} = 18$$

Use your beaded number line to solve

[www.drnickinewton.com](http://www.drnickinewton.com)



$$12 + \underline{6} = 18$$

[www.drnickinewton.com](http://www.drnickinewton.com)



$$24 + \underline{\quad} = 44$$


Use your beaded number line to solve

[www.drnickinewton.com](http://www.drnickinewton.com)



$$24 + \underline{40} = 44$$

[www.drnickinewton.com](http://www.drnickinewton.com)



$$19 + \underline{\quad} = 39$$


Use your beaded number line to solve

[www.drnickinewton.com](http://www.drnickinewton.com)



$$19 + \underline{20} = 39$$


[www.drnickinewton.com](http://www.drnickinewton.com)



$$44 + \underline{\quad} = 88$$


Use your beaded number line to solve

[www.drnickinewton.com](http://www.drnickinewton.com)



$$44 + \underline{44} = 88$$

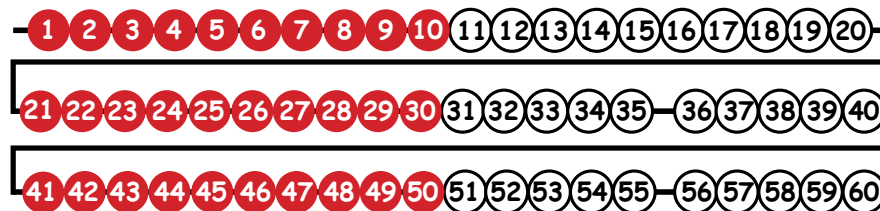
[www.drnickinewton.com](http://www.drnickinewton.com)



$$35 + \underline{\quad} = 55$$

Use your beaded number line to solve

[www.drnickinewton.com](http://www.drnickinewton.com)



$$35 + \underline{20} = 55$$

[www.drnickinewton.com](http://www.drnickinewton.com)



$$20 + \underline{\quad} = 28$$


Use your beaded number line to solve

[www.drnickinewton.com](http://www.drnickinewton.com)



$$20 + \underline{8} = 28$$

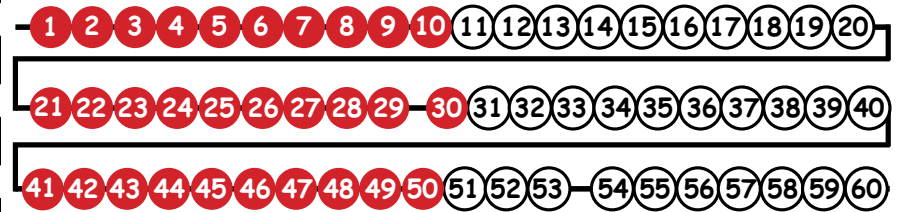
[www.drnickinewton.com](http://www.drnickinewton.com)



$$29 + \underline{\quad} = 53$$


Use your beaded number line to solve

[www.drnickinewton.com](http://www.drnickinewton.com)



$$29 + \underline{24} = 53$$


[www.drnickinewton.com](http://www.drnickinewton.com)



$$67 + \underline{\quad} = 93$$

Use your beaded number line to solve

[www.drnickinewton.com](http://www.drnickinewton.com)



$$67 + \underline{26} = 93$$

[www.drnickinewton.com](http://www.drnickinewton.com)





$$24 + \underline{\quad} = 69$$

Use your beaded number line to solve

[www.drnickinewton.com](http://www.drnickinewton.com)



$$24 + \underline{45} = 69$$

[www.drnickinewton.com](http://www.drnickinewton.com)



$$17 + \underline{\quad} = 27$$

Use your beaded number line to solve

[www.drnickinewton.com](http://www.drnickinewton.com)



$$17 + \underline{10} = 27$$

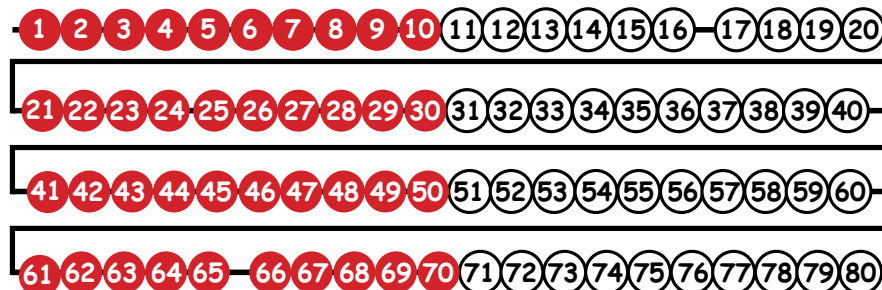
[www.drnickinewton.com](http://www.drnickinewton.com)



$$16 + \underline{\quad} = 65$$

Use your beaded number line to solve

[www.drnickinewton.com](http://www.drnickinewton.com)



$$16 + \underline{49} = 65$$

[www.drnickinewton.com](http://www.drnickinewton.com)



$$66 + \underline{\quad} = 74$$

Use your beaded number line to solve

[www.drnickinewton.com](http://www.drnickinewton.com)



$$66 + \underline{8} = 74$$

[www.drnickinewton.com](http://www.drnickinewton.com)