





THE BAKERY



Pull a card and act out the problem. Record your answer on the sheet.

Use the icons to act out the story.



The bakery
made 1 🍪
and 1 🍪. How
many cookies
did they make
altogether?

The bakery
made 1 🍪
and 2 🍪. How
many cookies
did they make
altogether?

The bakery
made 1 🍪
and 3 🍪. How
many cookies
did they make
altogether?

The bakery
made 1 🍪
and 4 🍪. How
many cookies
did they make
altogether?

The bakery
made 2 🍪
and 2 🍪. How
many cookies
did they make
altogether?

The bakery
made 3 🍪
and 2 🍪. How
many cookies
did they make
altogether?

The bakery
made 4 🍪
and 1 🍪. How
many cookies
did they make
altogether?

The bakery
made 5 🍪
and 0 🍪. How
many cookies
did they make
altogether?

The bakery
made 2 🍪
and 4 🍪. How
many cookies
did they make
altogether?

The bakery
made 2 🍪
and 5 🍪. How
many cookies
did they make
altogether?

The bakery
made 2 🍪
and 6 🍪. How
many cookies
did they make
altogether?

The bakery
made 2 🍪
and 7 🍪. How
many cookies
did they make
altogether?

The bakery
made 2 🍪
and 8 🍪. How
many cookies
did they make
altogether?

The bakery
made 3 🍪
and 3 🍪. How
many cookies
did they make
altogether?

The bakery
made 3 🍪
and 4 🍪. How
many cookies
did they make
altogether?

The bakery
made 3 🍪
and 5 🍪. How
many cookies
did they make
altogether?

The bakery
made 3 🍪
and 6 🍪. How
many cookies
did they make
altogether?

The bakery
made 3 🍪
and 7 🍪. How
many cookies
did they make
altogether?

The bakery
made 4 🍪
and 6 🍪. How
many cookies
did they make
altogether?

The bakery
made 5 🍪
and 5 🍪. How
many cookies
did they make
altogether?

The bakery
made 0 🍪
and 1 🍪. How
many cookies
did they make
altogether?

The bakery
made 2 🍪
and 1 🍪. How
many cookies
did they make
altogether?

The bakery
made 3 🍪
and 1 🍪. How
many cookies
did they make
altogether?

The bakery
made 4 🍪
and 1 🍪. How
many cookies
did they make
altogether?

The bakery
made 0 🍪
and 0 🍪. How
many cookies
did they make
altogether?

The bakery
made 2 🍪
and 3 🍪. How
many cookies
did they make
altogether?

The bakery
made 1 🍪
and 4 🍪. How
many cookies
did they make
altogether?

The bakery
made 0 🍪
and 5 🍪. How
many cookies
did they make
altogether?

The bakery
made 4 🍪
and 2 🍪. How
many cookies
did they make
altogether?

The bakery
made 5 🍪
and 2 🍪. How
many cookies
did they make
altogether?

The bakery
made 6 🍪
and 2 🍪. How
many cookies
did they make
altogether?

The bakery
made 7 🍪
and 2 🍪. How
many cookies
did they make
altogether?

The bakery
made 8 🍪
and 2 🍪. How
many cookies
did they make
altogether?

The bakery
made 4 🍪
and 4 🍪. How
many cookies
did they make
altogether?

The bakery
made 4 🍪
and 3 🍪. How
many cookies
did they make
altogether?

The bakery
made 5 🍪
and 3 🍪. How
many cookies
did they make
altogether?

The bakery
made 6 🍪
and 3 🍪. How
many cookies
did they make
altogether?

The bakery
made 7 🍪
and 3 🍪. How
many cookies
did they make
altogether?

The bakery
made 6 🍪
and 4 🍪. How
many cookies
did they make
altogether?

The bakery
made 1 🍪
and 0 🍪. How
many cookies
did they make
altogether?

The bakery
had 10 🍪.
They sold 8 🍪.
How many do
they have left?

The bakery
had 10 🍪.
They sold 7 🍪.
How many do
they have left?

The bakery
had 10 🍪.
They sold 6 🍪.
How many do
they have left?

The bakery
had 10 🍪.
They sold 4 🍪.
How many do
they have left?

The bakery
had 10 🍪.
They sold 3 🍪.
How many do
they have left?

The bakery
had 9 🍪.
They sold 7 🍪.
How many do
they have left?

The bakery

had 9 🍪.

They sold 6 🍪.

How many do
they have left?

The bakery

had 9 🍪.

They sold 4 🍪.

How many do
they have left?

The bakery

had 9 🍪.

They sold 3 🍪.

How many do
they have left?

The bakery

had 9 🍪.

They sold 5 🍪.

How many do
they have left?

The bakery

had 9 🍪.

They sold 2 🍪.

How many do
they have left?

The bakery

had 8 🍪.

They sold 6 🍪.

How many do
they have left?

The bakery
had 8 🍪.
They sold 4 🍪.
How many do
they have left?

The bakery
had 8 🍪.
They sold 3 🍪.
How many do
they have left?

The bakery
had 8 🍪.
They sold 5 🍪.
How many do
they have left?

The bakery
had 8 🍪.
They sold 2 🍪.
How many do
they have left?

The bakery
had 7 🍪.
They sold 4 🍪.
How many do
they have left?

The bakery
had 7 🍪.
They sold 3 🍪.
How many do
they have left?

The bakery
had 7 🍪.
They sold 5 🍪.
How many do
they have left?

The bakery
had 7 🍪.
They sold 2 🍪.
How many do
they have left?

The bakery
had 6 🍪.
They sold 4 🍪.
How many do
they have left?

The bakery
had 6 🍪.
They sold 3 🍪.
How many do
they have left?

The bakery
had 6 🍪.
They sold 2 🍪.
How many do
they have left?

The bakery
had 5 🍪.
They sold 3 🍪.
How many do
they have left?

The bakery
had 5 🍪.

They sold 2 🍪.

How many do
they have left?

Recording Sheet

ADDITION

1. _____ + _____ = _____

2. _____ + _____ = _____

3. _____ + _____ = _____

4. _____ + _____ = _____

5. _____ + _____ = _____

SUBTRACTION

1. _____ - _____ = _____

2. _____ - _____ = _____

3. _____ - _____ = _____

4. _____ - _____ = _____

5. _____ - _____ = _____