













Pull a card and act out the problem. Record your answer on the sheet.



The bakery
made 1 
and 1 . How
many cupcakes
did they make
altogether?



The bakery
made 1 
and 2 . How
many cupcakes
did they make
altogether?



The bakery
made 1 
and 3 . How
many cupcakes
did they make
altogether?



The bakery
made 1 
and 4 . How
many cupcakes
did they make
altogether?



The bakery
made 2 
and 2 . How
many cupcakes
did they make
altogether?



The bakery
made 3 
and 2 . How
many cupcakes
did they make
altogether?



The bakery
made 4 
and 1 . How
many cupcakes
did they make
altogether?



The bakery
made 5 
and 0 . How
many cupcakes
did they make
altogether?



The bakery
made 2 
and 4 . How
many cupcakes
did they make
altogether?



The bakery
made 2 
and 5 . How
many cupcakes
did they make
altogether?



The bakery
made 2 
and 6 . How
many cupcakes
did they make
altogether?



The bakery
made 2 
and 7 . How
many cupcakes
did they make
altogether?



The bakery
made 2 
and 8 . How
many cupcakes
did they make
altogether?



The bakery
made 3 
and 3 . How
many cupcakes
did they make
altogether?



The bakery
made 3 
and 4 . How
many cupcakes
did they make
altogether?



The bakery
made 3 
and 5 . How
many cupcakes
did they make
altogether?



The bakery
made 3 
and 6 . How
many cupcakes
did they make
altogether?



The bakery
made 3 
and 7 . How
many cupcakes
did they make
altogether?



The bakery
made 4 
and 6 . How
many cupcakes
did they make
altogether?



The bakery
made 5 
and 5 . How
many cupcakes
did they make
altogether?



The bakery
made 0 
and 1 . How
many cupcakes
did they make
altogether?



The bakery
made 2 
and 1 . How
many cupcakes
did they make
altogether?



The bakery
made 3 
and 1 . How
many cupcakes
did they make
altogether?



The bakery
made 4 
and 1 . How
many cupcakes
did they make
altogether?



The bakery
made 0 
and 0 . How
many cupcakes
did they make
altogether?



The bakery
made 2 
and 3 . How
many cupcakes
did they make
altogether?



The bakery
made 1 
and 4 . How
many cupcakes
did they make
altogether?



The bakery
made 0 
and 5 . How
many cupcakes
did they make
altogether?



The bakery
made 4 
and 2 . How
many cupcakes
did they make
altogether?



The bakery
made 5 
and 2 . How
many cupcakes
did they make
altogether?



The bakery
made 6 
and 2  . How
many cupcakes
did they make
altogether?



The bakery
made 7 
and 2  . How
many cupcakes
did they make
altogether?



The bakery
made 8 
and 2  . How
many cupcakes
did they make
altogether?



The bakery
made 4 
and 4  . How
many cupcakes
did they make
altogether?



The bakery
made 4 
and 3  . How
many cupcakes
did they make
altogether?



The bakery
made 5 
and 3  . How
many cupcakes
did they make
altogether?



The bakery
made 6 
and 3 . How
many cupcakes
did they make
altogether?



The bakery
made 7 
and 3 . How
many cupcakes
did they make
altogether?



The bakery
made 6 
and 4 . How
many cupcakes
did they make
altogether?



The bakery
made 1 
and 0 . How
many cupcakes
did they make
altogether?



The bakery
had 10  .
They sold 8  .
How many do
they have left?

The bakery
had 10  .
They sold 7  .
How many do
they have left?

The bakery
had 10  .
They sold 6  .
How many do
they have left?

The bakery
had 10  .
They sold 4  .
How many do
they have left?

The bakery
had 10  .
They sold 3  .
How many do
they have left?

The bakery
had 9  .
They sold 7  .
How many do
they have left?

The bakery
had 9 .

They sold 6 .

How many do
they have left?

The bakery
had 9 .

They sold 4 .

How many do
they have left?

The bakery
had 9 .

They sold 3 .

How many do
they have left?

The bakery
had 9 .

They sold 5 .

How many do
they have left?

The bakery
had 9 .

They sold 2 .

How many do
they have left?

The bakery
had 8 .

They sold 6 .

How many do
they have left?

The bakery
had 8 .

They sold 4 .

How many do
they have left?

The bakery
had 8 .

They sold 3 .

How many do
they have left?

The bakery
had 8 .

They sold 5 .

How many do
they have left?

The bakery
had 8 .

They sold 2 .

How many do
they have left?

The bakery
had 7 .

They sold 4 .

How many do
they have left?

The bakery
had 7 .

They sold 3 .

How many do
they have left?

The bakery
had 7 .

They sold 5 .

How many do
they have left?

The bakery
had 7 .

They sold 2 .

How many do
they have left?

The bakery
had 6 .

They sold 4 .

How many do
they have left?

The bakery
had 6 .

They sold 3 .

How many do
they have left?

The bakery
had 6 .

They sold 2 .

How many do
they have left?

The bakery
had 5 .

They sold 3 .

How many do
they have left?

The bakery
had 5 .

They sold 2 .

How many do
they have left?

Recording Sheet

ADDITION

1. _____ + _____ = _____

2. _____ + _____ = _____

3. _____ + _____ = _____

4. _____ + _____ = _____

5. _____ + _____ = _____

SUBTRACTION

1. _____ - _____ = _____

2. _____ - _____ = _____

3. _____ - _____ = _____

4. _____ - _____ = _____

5. _____ - _____ = _____