





$$8 \text{  + 2 \text{ $$

SOLVE WITH YOUR BEADED NUMBER LINE

[www.drnickinewton.com](http://www.drnickinewton.com)



[www.drnickinewton.com](http://www.drnickinewton.com)

$$17 \text{  + 3 \text{ $$

SOLVE WITH YOUR BEADED NUMBER LINE

[www.drnickinewton.com](http://www.drnickinewton.com)



[www.drnickinewton.com](http://www.drnickinewton.com)

$$4 \text{ turtles} + 1 \text{ turtle}$$

SOLVE WITH YOUR BEADED NUMBER LINE

[www.drnickinewton.com](http://www.drnickinewton.com)



[www.drnickinewton.com](http://www.drnickinewton.com)


$$1 \text{ shark} + 1 \text{ shark}$$

SOLVE WITH YOUR BEADED NUMBER LINE

[www.drnickinewton.com](http://www.drnickinewton.com)



[www.drnickinewton.com](http://www.drnickinewton.com)


$$9 + 2$$


SOLVE WITH YOUR BEADED NUMBER LINE

[www.drnickinewton.com](http://www.drnickinewton.com)



[www.drnickinewton.com](http://www.drnickinewton.com)



$$5 + 4$$


SOLVE WITH YOUR BEADED NUMBER LINE

[www.drnickinewton.com](http://www.drnickinewton.com)



[www.drnickinewton.com](http://www.drnickinewton.com)



$$8 \text{  + 4 \text{ $$

SOLVE WITH YOUR BEADED NUMBER LINE

[www.drnickinewton.com](http://www.drnickinewton.com)



[www.drnickinewton.com](http://www.drnickinewton.com)



$$18 \text{  + 1 \text{ $$

SOLVE WITH YOUR BEADED NUMBER LINE

[www.drnickinewton.com](http://www.drnickinewton.com)



[www.drnickinewton.com](http://www.drnickinewton.com)



$$9 \text{  + 4 \text{ $$

SOLVE WITH YOUR BEADED NUMBER LINE

[www.drnickinewton.com](http://www.drnickinewton.com)



[www.drnickinewton.com](http://www.drnickinewton.com)

$$2 \text{  + 1 \text{ $$

SOLVE WITH YOUR BEADED NUMBER LINE

[www.drnickinewton.com](http://www.drnickinewton.com)



[www.drnickinewton.com](http://www.drnickinewton.com)

$$2 \text{ } \img alt="yellow star" data-bbox="175 248 238 330"/> + 2 \text{ } \img alt="yellow star" data-bbox="418 248 481 330"/>$$

SOLVE WITH YOUR BEADED NUMBER LINE

[www.drnickinewton.com](http://www.drnickinewton.com)



[www.drnickinewton.com](http://www.drnickinewton.com)

$$3 \text{ } \img alt="red crab" data-bbox="188 648 244 753"/> + 3 \text{ } \img alt="red crab" data-bbox="418 648 474 753"/>$$

SOLVE WITH YOUR BEADED NUMBER LINE

[www.drnickinewton.com](http://www.drnickinewton.com)



[www.drnickinewton.com](http://www.drnickinewton.com)

$$3 \text{ 🐙 } + 4 \text{ 🐙 }$$

SOLVE WITH YOUR BEADED NUMBER LINE

[www.drnickinewton.com](http://www.drnickinewton.com)



[www.drnickinewton.com](http://www.drnickinewton.com)

$$3 \text{ 🐠 } + 5 \text{ 🐠 }$$

SOLVE WITH YOUR BEADED NUMBER LINE

[www.drnickinewton.com](http://www.drnickinewton.com)



[www.drnickinewton.com](http://www.drnickinewton.com)

$$8 \text{ ☆} + 6 \text{ ☆}$$

SOLVE WITH YOUR BEADED NUMBER LINE

[www.drnickinewton.com](http://www.drnickinewton.com)



[www.drnickinewton.com](http://www.drnickinewton.com)

$$10 \text{ 🐚} + 5 \text{ 🐚}$$


SOLVE WITH YOUR BEADED NUMBER LINE

[www.drnickinewton.com](http://www.drnickinewton.com)



[www.drnickinewton.com](http://www.drnickinewton.com)




$$9 + 7$$


SOLVE WITH YOUR BEADED NUMBER LINE

[www.drnickinewton.com](http://www.drnickinewton.com)



[www.drnickinewton.com](http://www.drnickinewton.com)



$$10 + 8$$


SOLVE WITH YOUR BEADED NUMBER LINE

[www.drnickinewton.com](http://www.drnickinewton.com)



[www.drnickinewton.com](http://www.drnickinewton.com)



$$8 \text{  + 9 \text{ $$

SOLVE WITH YOUR BEADED NUMBER LINE

[www.drnickinewton.com](http://www.drnickinewton.com)



[www.drnickinewton.com](http://www.drnickinewton.com)

$$2 \text{  + 9 \text{ $$

SOLVE WITH YOUR BEADED NUMBER LINE

[www.drnickinewton.com](http://www.drnickinewton.com)



[www.drnickinewton.com](http://www.drnickinewton.com)