





$$1 \text{  + 2 \text{ $$

SOLVE WITH YOUR BEADED NUMBER LINE
www.drnickinewton.com




www.drnickinewton.com

$$3 \text{  + 4 \text{ $$

SOLVE WITH YOUR BEADED NUMBER LINE
www.drnickinewton.com




www.drnickinewton.com

$$2 + 5$$


SOLVE WITH YOUR BEADED NUMBER LINE
www.drnickinewton.com



www.drnickinewton.com

$$4 + 4$$


SOLVE WITH YOUR BEADED NUMBER LINE
www.drnickinewton.com



www.drnickinewton.com

$$1 \text{ (ladybug)} + 1 \text{ (beetle)}$$

SOLVE WITH YOUR BEADED NUMBER LINE
www.drnickinewton.com





www.drnickinewton.com

$$2 \text{ (caterpillar)} + 3 \text{ (bee)}$$

SOLVE WITH YOUR BEADED NUMBER LINE
www.drnickinewton.com





www.drnickinewton.com

$$4 \text{  + 2 \text{ $$

SOLVE WITH YOUR BEADED NUMBER LINE
www.drnickinewton.com





www.drnickinewton.com

$$3 \text{  + 1 \text{ $$

SOLVE WITH YOUR BEADED NUMBER LINE
www.drnickinewton.com





www.drnickinewton.com

$$6 \text{  + 3 \text{ $$

SOLVE WITH YOUR BEADED NUMBER LINE
www.drnickinewton.com



www.drnickinewton.com

$$8 \text{  + 2 \text{ $$

SOLVE WITH YOUR BEADED NUMBER LINE
www.drnickinewton.com



www.drnickinewton.com