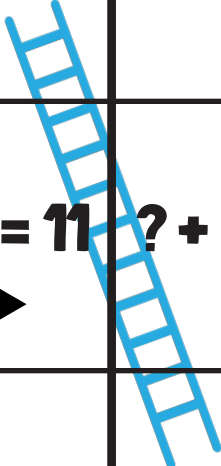
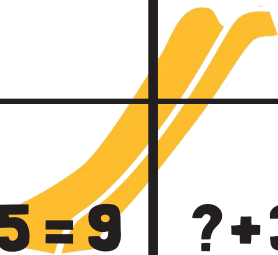
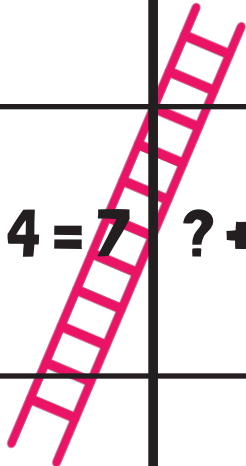
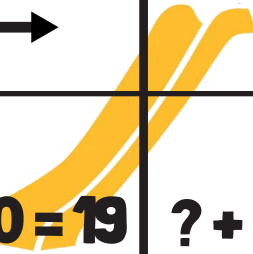
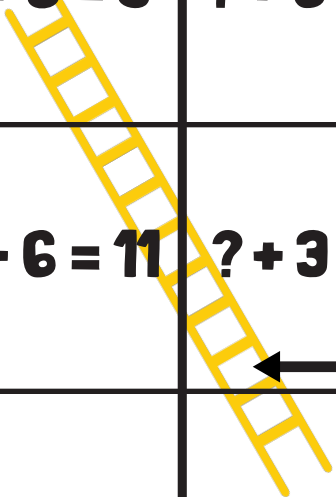
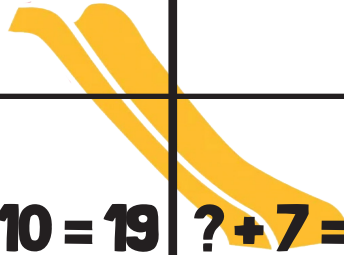


SLIDES AND LADDERS

DOUBLES + 1

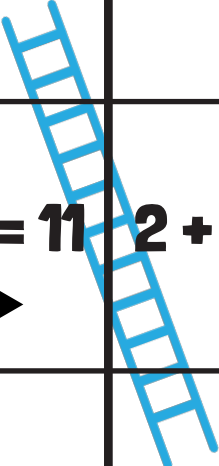
Instructions: Roll the dice. Whoever has the highest number starts. Roll, move and solve the problem. If you land on a ladder move up. If you land on a slide, move down. Whoever reaches finish first wins.

| | | | | |
|--|---|---|--|----------------------|
| FINISH  | $? + 10 = 19$ | $? + 1 = 2$ | $? + 6 = 11$ | $? + 10 = 19$ ← ↑ |
| $? + 6 = 11$ ↑ → | $? + 3 = 5$ | $? + 5 = 9$  | $? + 3 = 5$ | $? + 7 = 15$ |
| $? + 7 = 13$ ↑ | $? + 9 = 17$ | $? + 4 = 7$ | $? + 1 = 2$  | $? + 6 = 11$ ← ↑ |
| $? + 9 = 17$ ↑ → | $? + 6 = 12$  | $? + 4 = 7$ | $? + 5 = 9$  | $? + 6 = 11$ |
| $? + 10 = 19$ ↑ | $? + 5 = 9$ | $? + 9 = 17$  | $? + 6 = 11$ | $? + 3 = 5$ ← ↑ |
| START → | $? + 10 = 19$ | $? + 7 = 13$ | $? + 1 = 2$ | $? + 5 = 9$ |

SLIDES AND LADDERS

DOUBLES + 1

Instructions: Roll the dice. Whoever has the highest number starts. Roll, move and solve the problem. If you land on a ladder move up. If you land on a slide, move down. Whoever reaches finish first wins.

| | | | | |
|---|--------------|--------------|--------------|--------------|
| FINISH | $9 + ? = 19$ | $1 + ? = 2$ | $5 + ? = 11$ | $9 + ? = 19$ |
|  | $5 + ? = 11$ | $2 + ? = 5$ | $4 + ? = 9$ | $2 + ? = 5$ |
| $8 + ? = 15$ | $2 + ? = 5$ | $8 + ? = 15$ | | |
| $6 + ? = 13$ | $8 + ? = 17$ | $3 + ? = 7$ | $1 + ? = 2$ | $5 + ? = 11$ |
| $8 + ? = 17$ | $6 + ? = 12$ | $3 + ? = 7$ | $4 + ? = 9$ | $5 + ? = 11$ |
| $9 + ? = 19$ | $4 + ? = 9$ | $8 + ? = 17$ | $5 + ? = 11$ | $2 + ? = 5$ |
| START | $9 + ? = 19$ | $6 + ? = 13$ | $1 + ? = 2$ | $4 + ? = 9$ |

SLIDES AND LADDERS

DOUBLES + 1

Instructions: Roll the dice. Whoever has the highest number starts. Roll, move and solve the problem. If you land on a ladder move up. If you land on a slide, move down. Whoever reaches finish first wins.

| | | | | |
|---------------|----------|---------|---------|----------|
| FINISH | $9+10=?$ | $1+1=?$ | $5+6=?$ | $9+10=?$ |
| $5+6=?$ | $2+3=?$ | $4+5=?$ | $2+3=?$ | $8+7=?$ |
| $6+7=?$ | $8+9=?$ | $3+4=?$ | $1+1=?$ | $5+6=?$ |
| $8+9=?$ | $6+6=?$ | $3+4=?$ | $4+5=?$ | $5+6=?$ |
| $9+10=?$ | $4+5=?$ | $8+9=?$ | $5+6=?$ | $2+3=?$ |
| START | $9+10=?$ | $6+7=?$ | $1+1=?$ | $4+5=?$ |