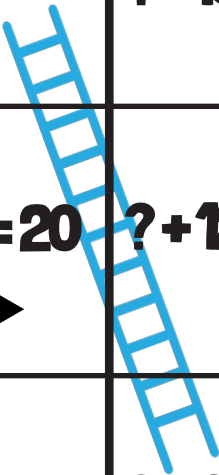




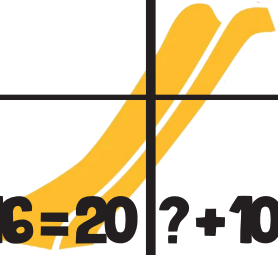
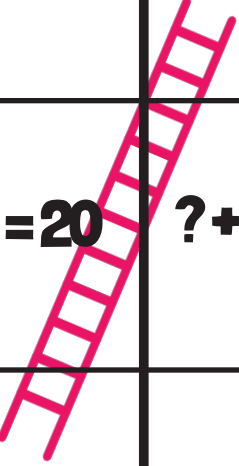




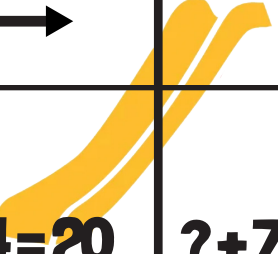
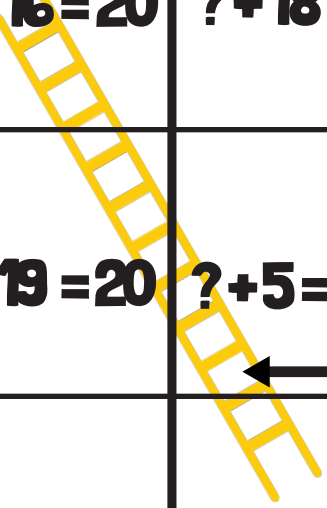
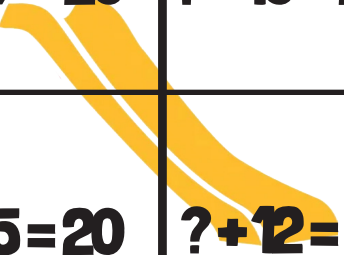






SLIDES AND LADDERS

MAKE 20

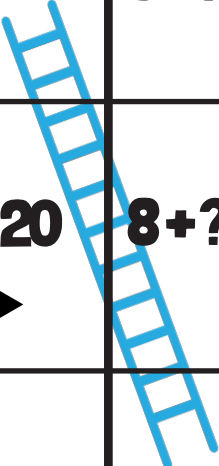
Instructions: Roll the dice. Whoever has the highest number starts. Roll, move and solve the problem. If you land on a ladder move up. If you land on a slide, move down. Whoever reaches finish first wins.

FINISH 	$? + 19 = 20$	$? + 7 = 20$	$? + 17 = 20$	$? + 11 = 20$  
$? + 15 = 20$  	$? + 12 = 20$	$? + 16 = 20$ 	$? + 10 = 20$	$? + 8 = 20$
$? + 1 = 20$	$? + 0 = 20$	$? + 1 = 20$	$? + 11 = 20$ 	$? + 14 = 20$  
$? + 1 = 20$  	$? + 17 = 20$ 	$? + 13 = 20$	$? + 16 = 20$ 	$? + 18 = 20$
$? + 4 = 20$	$? + 7 = 20$ 	$? + 10 = 20$	$? + 19 = 20$	$? + 5 = 20$  
START 	$? + 5 = 20$	$? + 12 = 20$	$? + 14 = 20$	$? + 9 = 20$ 

SLIDES AND LADDERS

MAKE 20

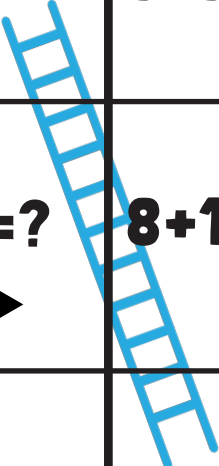

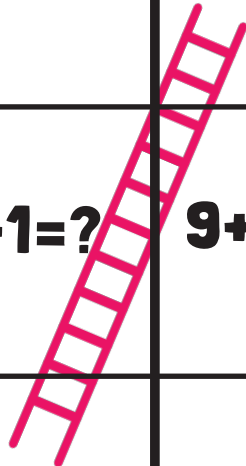
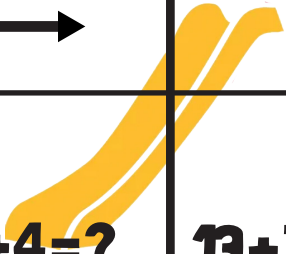
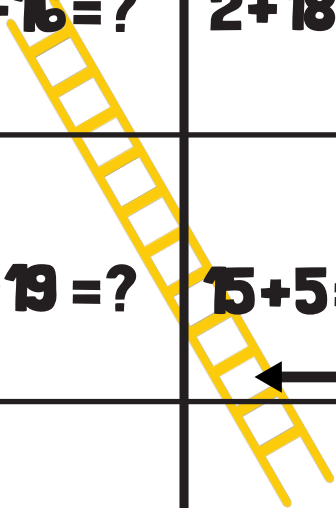

Instructions: Roll the dice. Whoever has the highest number starts. Roll, move and solve the problem. If you land on a ladder move up. If you land on a slide, move down. Whoever reaches finish first wins.

FINISH	$1+?=20$	$13+?=20$	$3+?=20$	$9+?=20$
	$5+?=20$	$8+?=20$	$4+?=20$	$10+?=20$
$18+?=20$	$20+?=20$	$19+?=20$	$9+?=20$	$6+?=20$
$19+?=20$	$3+?=20$	$7+?=20$	$4+?=20$	$2+?=20$
$16+?=20$	$13+?=20$	$10+?=20$	$1+?=20$	$15+?=20$
START	$15+?=20$	$8+?=20$	$6+?=20$	$11+?=20$

SLIDES AND LADDERS

MAKE 20

Instructions: Roll the dice. Whoever has the highest number starts. Roll, move and solve the problem. If you land on a ladder move up. If you land on a slide, move down. Whoever reaches finish first wins.

FINISH 	$1+19=?$	$13+7=?$	$3+17=?$ 	$9+11=?$ ← ↑	
$5+15=?$ ↑ →	$8+12=?$	$4+16=?$	$10+10=?$ 	$12+8=?$	
↑	$18+1=?$	$20+0=?$	$19+1=?$	$9+11=?$	$6+14=?$ ← ↑
↑ →	$19+1=?$	$3+17=?$ 	$7+13=?$	$4+16=?$ 	$2+18=?$
↑	$16+4=?$ 	$13+7=?$	$10+10=?$	$1+19=?$	$15+5=?$ ← ↑
START →	$15+5=?$	$8+12=?$	$6+14=?$	$11+9=?$	