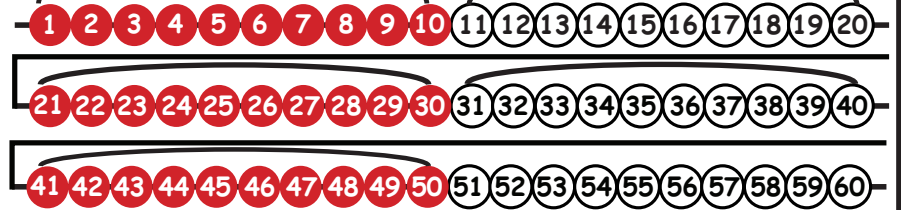


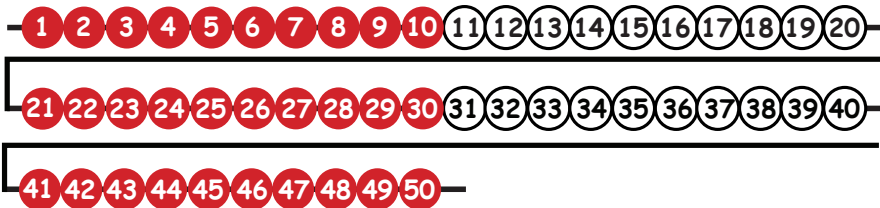
What is 5×10 ?

www.drnickinewton.com



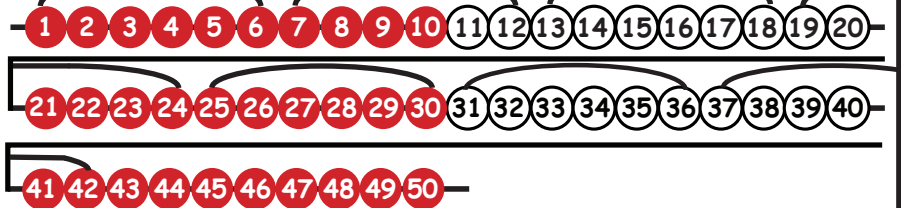
$$5 \times 10 = 50$$

www.drnickinewton.com



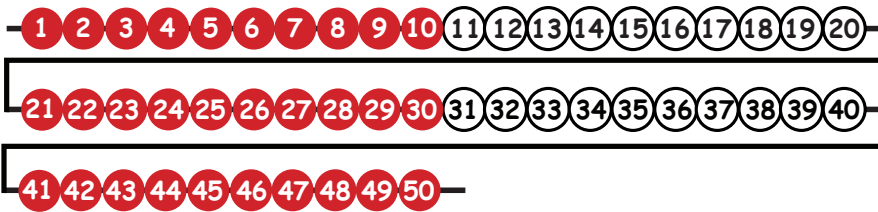
What is 7×6 ?

www.drnickinewton.com



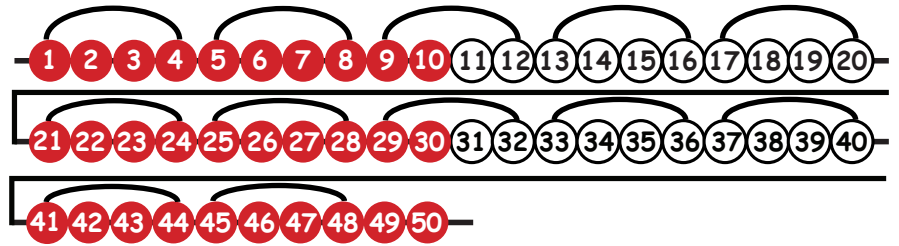
$$7 \times 6 = 42$$

www.drnickinewton.com



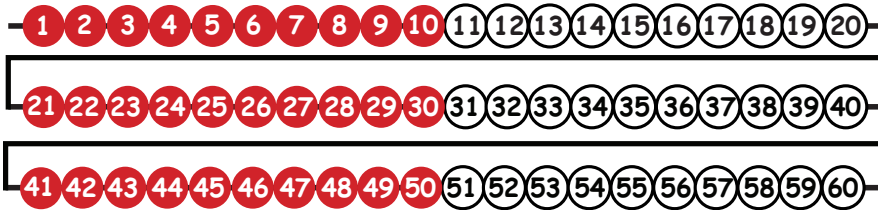
What is 12×4 ?

www.drnickinewton.com



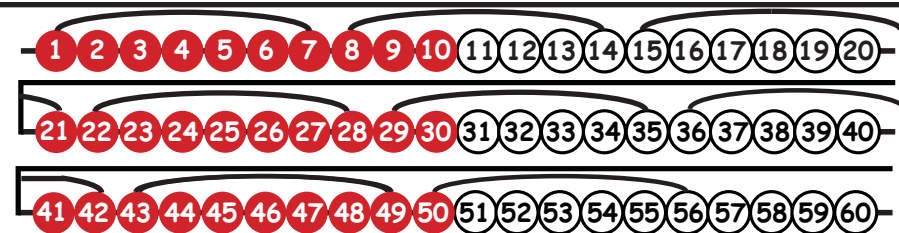
$$12 \times 4 = 48$$

www.drnickinewton.com




What is 8×7 ?

www.drnickinewton.com



$$8 \times 7 = 56$$

www.drnickinewton.com




What is 4×9 ?

www.drnickinewton.com



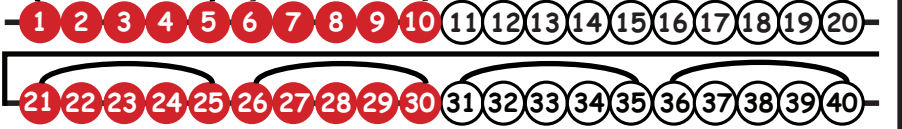
$$4 \times 9 = 36$$

www.drnickinewton.com



What is 8×5 ?

www.drnickinewton.com



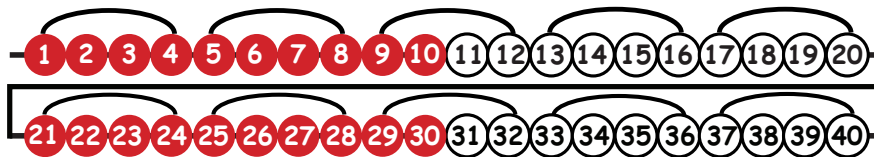
$$8 \times 5 = 40$$

www.drnickinewton.com



What is 10×4 ?

www.drnickinewton.com



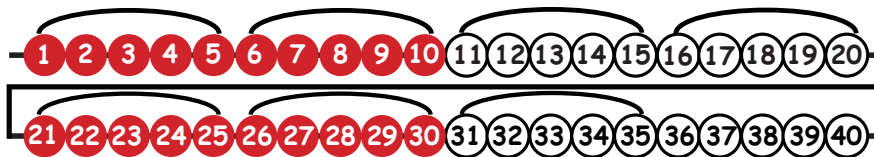
$$10 \times 4 = 40$$

www.drnickinewton.com



What is 7×5 ?

www.drnickinewton.com



$$7 \times 5 = 35$$

www.drnickinewton.com



What is 4×2 ?

www.drnickinewton.com




$$4 \times 2 = 8$$

www.drnickinewton.com



What is 2×5 ?

www.drnickinewton.com




$$2 \times 5 = 10$$

www.drnickinewton.com



Why is $2 \times 3 = ?$

www.drnickinewton.com



$$2 \times 3 = 6$$

www.drnickinewton.com



What is $5 \times 2 = ?$

www.drnickinewton.com



$$5 \times 2 = 10$$

www.drnickinewton.com



What is 5×4 ?

www.drnickinewton.com




$$5 \times 4 = 20$$

www.drnickinewton.com



What is 3×3 ?

www.drnickinewton.com



$$3 \times 3 = 9$$

www.drnickinewton.com

1 2 3 4 5 6 7 8 9 10 11 12 13 14 15 16 17 18 19 20

What is 3×6 ?

www.drnickinewton.com

1 2 3 4 5 6 7 8 9 10 11 12 13 14 15 16 17 18 19 20



A number line from 1 to 20. The first 10 numbers (1-10) are red, and the next 10 (11-20) are white. Three black arcs are drawn above the line, each spanning 6 units: from 1 to 6, 7 to 12, and 13 to 18. The number 18 is the end of the third arc.

$$3 \times 6 = 18$$

www.drnickinewton.com

1 2 3 4 5 6 7 8 9 10 11 12 13 14 15 16 17 18 19 20

21 22 23 24 25 26 27 28 29 30

Whay is 6×5 ?

www.drnickinewton.com

1 2 3 4 5 6 7 8 9 10 11 12 13 14 15 16 17 18 19 20

21 22 23 24 25 26 27 28 29 30



A number line from 1 to 20. The first 10 numbers (1-10) are red, and the next 10 (11-20) are white. Five black arcs are drawn above the line, each spanning 6 units: from 1 to 6, 7 to 12, 13 to 18, 19 to 24, and 25 to 30. The number 30 is the end of the fifth arc.

$$6 \times 5 = 30$$

www.drnickinewton.com

1 2 3 4 5 6 7 8 9 10 11 12 13 14 15 16 17 18 19 20

21 22 23 24 25 26 27 28 29 30

What is 4×7 ?

www.drnickinewton.com

1 2 3 4 5 6 7 8 9 10 11 12 13 14 15 16 17 18 19 20

21 22 23 24 25 26 27 28 29 30

$4 \times 7 = 28$

www.drnickinewton.com

1 2 3 4 5 6 7 8 9 10 11 12 13 14 15 16 17 18 19 20

21 22 23 24 25 26 27 28 29 30

What is 3×10 ?

www.drnickinewton.com

1 2 3 4 5 6 7 8 9 10 11 12 13 14 15 16 17 18 19 20

21 22 23 24 25 26 27 28 29 30

$3 \times 10 = 30$

www.drnickinewton.com



What is 2×8 ?

www.drnickinewton.com



$$2 \times 8 = 16$$

www.drnickinewton.com



What is 9×3 ?

www.drnickinewton.com



$$9 \times 3 = 27$$

www.drnickinewton.com